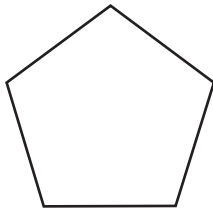


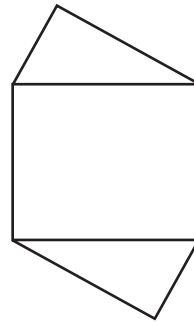
**Practice****Symmetry**

*Determine whether each figure has line symmetry. If it does, copy the figure and draw all lines of symmetry. If not, write no.*

1.



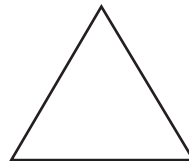
2.



3.



4.




*Determine whether each figure has rotational symmetry. Write yes or no.*

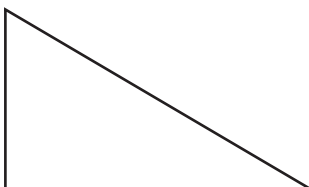
5.



6.



7.



8.

