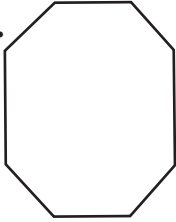
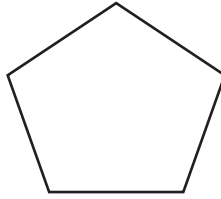


**Practice**Student Edition  
Pages 402–407***Naming Polygons******Identify each polygon by its sides. Then determine whether it appears to be regular or not regular. If not regular, explain why.***

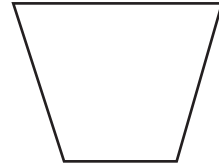
1.



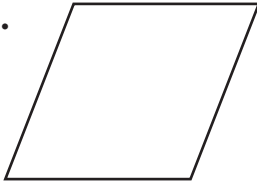
2.



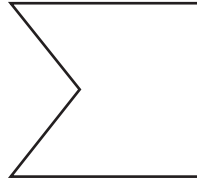
3.

***Classify each polygon as convex or concave.***

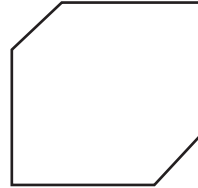
4.



5.



6.

***Name each part of heptagon ABCDEFG.***

7. two nonconsecutive vertices

8. two diagonals

9. three consecutive sides

10. four consecutive vertices

